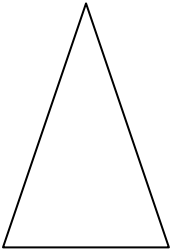



Directions: Draw the line of symmetry of the following plane figures. Figures may have more than one line of symmetry. In the space on the right, write how many lines of symmetry each has.

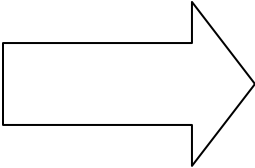
1.



2.



3.



4.



5.

